

Arithmetic

1. Add together 4 and 5

2. One less than 13 is ...

3. $20 - 8$

4. Double 8

Practice: Counting in 2s

5. How many gloves are there?






How much money is there?



6. Circle 18 socks.

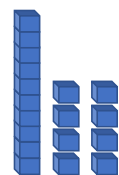


7. Match the number to the picture.



24

forty



You might want to talk to an adult



Use resources to help you




Spot the mistake

8. Complete the number tracks.

a.

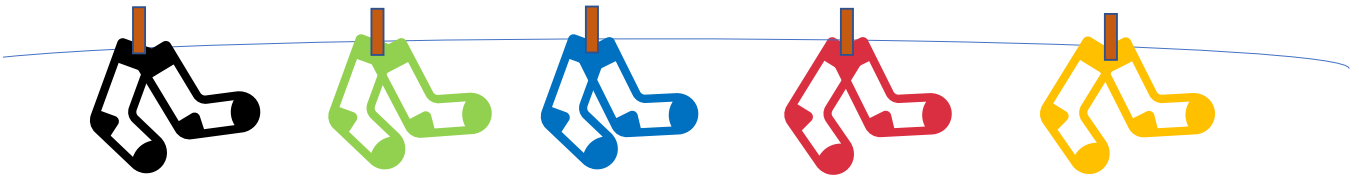
0	2	4		8	
---	---	---	--	---	--

b. 
14 16 22 24

c.


26	24		20	18	
----	----	--	----	----	--

9. What does the word 'pairs' mean?



10. Samuel has been told to circle 6 gloves.

Explain his mistake.



11. One panda has two cookies.



How many cookies would 4 pandas have?

How many cookies would 5 pandas have?

How many cookies would 10 pandas have?

Answers

Q no.	Question	Answer
1	Add together 4 and 5	9
2	One less than 13 is ...	12
3	$20 - 8$	12
4	Double 8	16
5	Count the objects.	32 gloves, 22p
6	Circle 18 socks.	Children need to circle 9 pairs of socks.
7	Match the number to the picture	Number shapes – forty, bicycles – Base 10 showing 18, eyes - 24
8	Complete the number tracks.	a. 6, 10, b. 18, 20, c. 22, 16
9	What does the word 'pairs' mean?	Pairs means a set of two things.
10	Explain Samuel mistake.	Samuel has circled 6 pairs of gloves (making 12 gloves) rather than 6 gloves in total.
11	How many cookies would 4 pandas have? How many cookies would 5 pandas have? How many cookies would 10 pandas have?	8 10 20